



Properties of 2D Shapes

Write down the properties of the shapes !



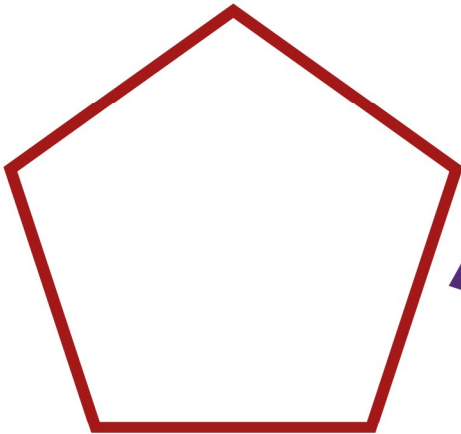
A circle has _____ sides

A circle has _____ corners




A octagon has _____ sides

A octagon has _____ corners



A pentagon has _____ sides

A pentagon has _____ corners




A hexagon has _____ sides

A hexagon has _____ corners

Properties of 2D Shapes

Write down the properties of the shapes !



A triangle has _____ sides

A triangle has _____ corners



A rectangle has _____ sides

A rectangle has _____ corners



A square has _____ sides

A square has _____ corners



A quadrilateral has _____ sides

A quadrilateral has _____ corners